

# Minibeast Maths Hunt

1. How many bees can you find?
2. Can you find the minibeast with 8 legs?
3. How many flying minibeasts are there?
4. How many worms can you spot?
5. How many woodlice are there?
6. How many minibeasts are on the ground?
7. Can you find a minibeast with more than 8 legs?
8. How many red minibeasts are there?
9. How many green minibeasts are there?
10. How many spotty minibeasts are there?
11. How many minibeasts are there altogether?

# Minibeast Maths Hunt



**Maths: Tuesday - Worksheet H** Can you now try and form the numbers starting at the correct starting point?

## Number Formation Activity

Can you trace the numbers?

0 0 0 0 0 0 0 0 0 0

1 1 1 1 1 1 1 1 1 1

2 2 2 2 2 2 2 2 2 2

3 3 3 3 3 3 3 3 3 3

4 4 4 4 4 4 4 4 4 4

5 5 5 5 5 5 5 5 5 5

6 6 6 6 6 6 6 6 6 6

7 7 7 7 7 7 7 7 7 7

8 8 8 8 8 8 8 8 8 8

9 9 9 9 9 9 9 9 9 9

# Number Formation

Can you trace the numbers?

10 10 10 10 10 10

11 11 11 11 11 11

12 12 12 12 12 12

13 13 13 13 13 13

14 14 14 14 14 14

15 15 15 15 15 15

16 16 16 16 16 16







17 17 17 17 17 17

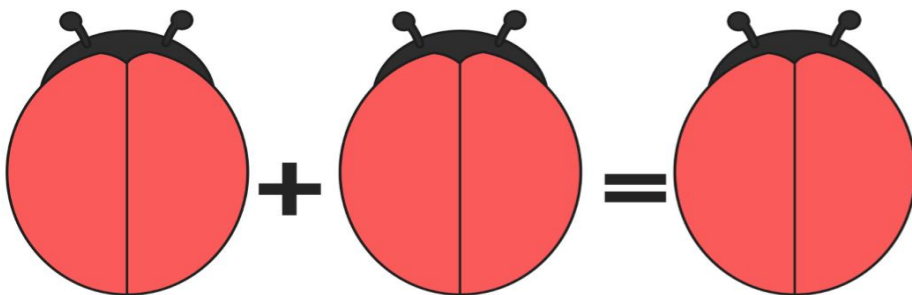
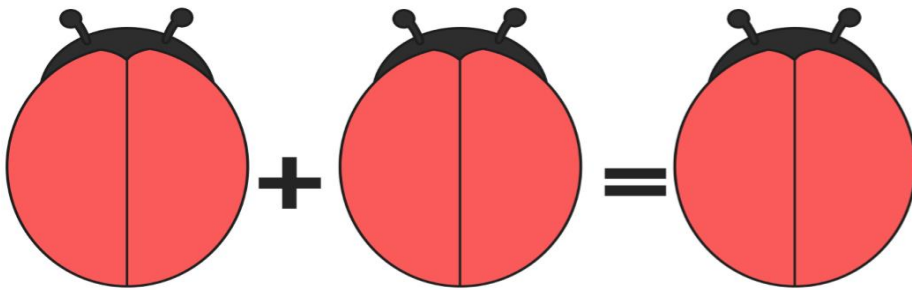



18 18 18 18 18 18

19 19 19 19 19 19

20 20 20 20 20 20

**Maths: Wednesday - Worksheet 1** Count the total number of spots on the ladybird.































**Maths: Thursday - Worksheet J** Can you work out the missing number? Use the number line to help you.



	+		=	
	+		=	
	+		=	
	+		=	
	+		=	
	+		=	
	+		=	
	+		=	

1	2	3	4	5	6	7	8	9	10
---	---	---	---	---	---	---	---	---	----



+



=



+



=



+



=



+



=



+



=







1	2	3	4	5	6	7	8	9	10
---	---	---	---	---	---	---	---	---	----



+




=



+



=



+



=



+



=



+




=




# Ladybird Doubles


Write the number sentence for each ladybird double.




$1 + 1 = \underline{\hspace{2cm}}$




$2 + 2 = \underline{\hspace{2cm}}$



$3 + 3 = \underline{\hspace{2cm}}$

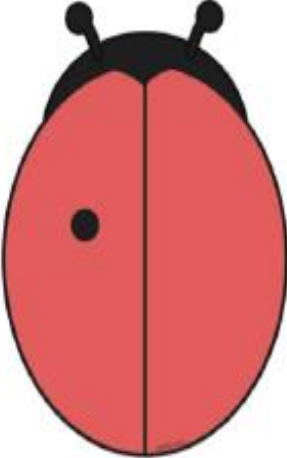


$4 + 4 = \underline{\hspace{2cm}}$



$5 + 5 = \underline{\hspace{2cm}}$


Can you double the lady bird spots? Can you write the number sum underneath?



$$\square + \square = \square$$



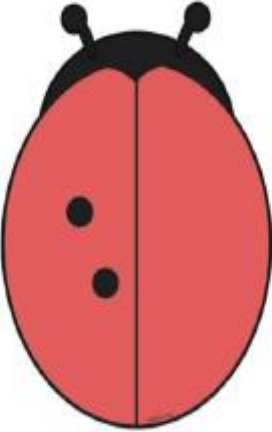
$$\square + \square = \square$$




$$\square + \square = \square$$



$$\square + \square = \square$$



$$\square + \square = \square$$



$$\square + \square = \square$$